






Name _____

Date _____

Which is heavier? Circle the object that is heavier than the other.



On the back, draw 3 objects that are lighter than your chair.